

Subject Code

1	0	3	3
---	---	---	---

STATE LEVEL ASSESSMENT(SA-1)

Session 2019 - 20

Class – 1

Subject : Mathematics English Medium (CBSE)

Time: 2 Hours

Total Marks

3	0
---	---

Student ID

--	--	--	--	--	--	--	--	--	--

Name of the Student _____

Name of the School _____

Obtained Marks (In figures)

--	--

(In words) _____

Signature of the Head Master _____

Signature of the Invigilator _____

Only for Valuation Purpose

							PAPER CODE							
STUDENT CODE														

1		9		Signature and Seal of Centre Superintendent	Signature of Valuer		
2		10					
3		11					
4		12					
5		13					
6		14					
7		15					
8				Date:		Date:	
Total Marks Obtained							

Instructions:

1. All Questions are compulsory. Each question carries 2 marks.
2. Answers of each question are to be written in this sheet only.
3. Teacher is instructed to read aloud each question and its options at a moderate pace. Do not give any hints while reading.

Tick the correct alternative:

Q.1 Which fruit is the smallest ?

2



Cherry



Mango



Banana



Watermelon

- a. Banana
c. Mango

- b. Cherry
d. Watermelon
- Ans : (b) cherry

Q.2 How many letters are there in the word “INDIA” ?

2

- a. 5 b. 4 c. 1 d. 6
- Ans : (a) 5

Q.3 What comes after 0 ?

2

- a. 1 b. 2 c. 3 d. 4
- Ans : (a) 1

Q.4 What comes between 3 and 5 ?

2

- a. 0 b. 4 c. 1 d. 6
- Ans : (b) 4

Q.5 The biggest number in the box

1, 12, 15, 20

 is

2

- a. 12 b. 15 c. 1 d. 20
- Ans (d) 20

Q.6 Solve :

2

$$0 + 2 = \square$$

- a. 0 b. 2 c. 1 d. 3 Ans : (b) 2

Q.7 Solve :

2

$$6 - 6 = \square$$

- a. 6 b. 0 c. 2 d. 12 Ans : (b) 0

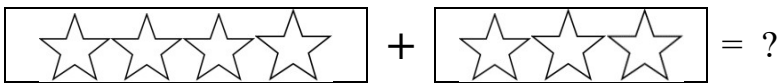
Q.8 How many tens are there in 12 ?

2

- a. 1 b. 2 c. 3 d. 5 Ans : (b) 2

Q.9 Add :

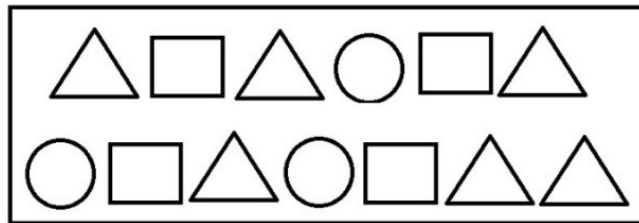
2



- a. 7 b. 1 c. 0 d. 5 Ans : (a) 7

Q.10 How many \triangle s are there in the box?

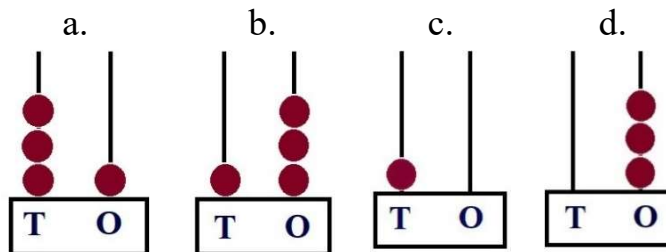
2



- a. 6 b. 3 c. 2 d. 4 Ans : (a) 6

Q.11 Which abacus shows the number 13 ?

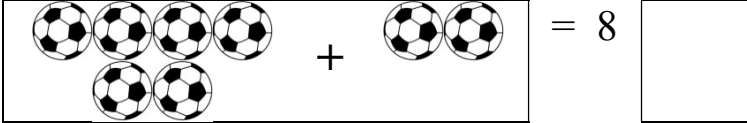
2




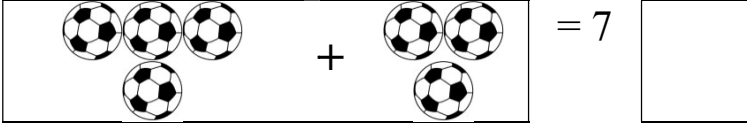
	√		
--	---	--	--

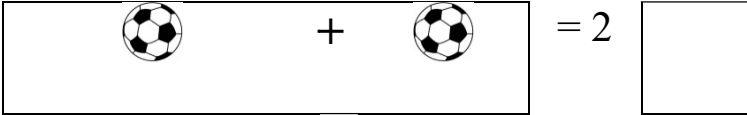
Q.12 Which one of the following addition is NOT correct ?

2

a.  = 8

b.  = 5

c.  = 7

d.  = 2

Q.13 Rahul has 8 pencils and Sonu has 7 pencils. How many pencils do they have altogether ?

2

- a. 8 b. 7 c. 15 d. 1Ans: (c) 15

Q.14 I am between 15 and 17. What number am I ?

2

- a. 15 b. 16 c. 17 d. 14Ans : (b) 16

Q.15 Look at the picture and write the answers :

2



a. How many fingers can be seen ? Ans:...two.

b. How many fingers can't be seen ? Ans : three